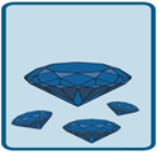



















Place Value

I have set different challenges for the children. They should know which colour is theirs. If the children are enjoying this and want to try a different challenge as well as their own that is perfectly fine.

 	<p>3. The children are discussing team points after playing a game.</p> <div style="display: flex; justify-content: space-around; align-items: flex-start;"> <div style="text-align: center;">  Evangeline </div> <div style="text-align: center;">  Reena </div> <div style="text-align: center;">  Tom </div> </div> <div style="margin-top: 10px;"> <p>The red team has 1,000 more than the green team.</p> <p>The green team has 7,500.</p> <p>The blue team has 1,000 less than the green team.</p> </div> <p>Tom thinks the blue team have scored the least. Is he correct? Explain your answer.</p> <p> RPS HW/Ext</p>
	<p>6. The children below have been playing a computer game. They are discussing their scores.</p> <div style="display: flex; justify-content: space-around; align-items: flex-start;"> <div style="text-align: center;">  George </div> <div style="text-align: center;">  Suki </div> <div style="text-align: center;">  Jamal </div> </div> <div style="margin-top: 10px;"> <p>On Level 5, I scored 1,000 more than Suki. I scored 5,475 on Level 6.</p> <p>I scored 7,290 on Level 5 but I scored 1,000 less than George on Level 6.</p> <p>I scored 1,000 less than Suki on Level 5 and 1,000 more than George on Level 6.</p> </div> <p>George thinks he has the highest scores on both levels. Is he correct? Explain your answer.</p> <p> RPS HW/Ext</p>
	<p>9. The children below have been playing pinball. They are discussing their scores.</p> <div style="display: flex; justify-content: space-around; align-items: flex-start;"> <div style="text-align: center;">  Reece </div> <div style="text-align: center;">  Charlene </div> <div style="text-align: center;">  Vassos </div> </div> <div style="margin-top: 10px;"> <p>I scored 1,000 more than Vassos then I scored another 1,000 points.</p> <p>I scored four thousand, two hundred and ninety-five.</p> <p>I scored 1,000 more than Charlene and then I scored 1,000 more points.</p> </div> <p>Reece thinks he has the highest score. Is he correct? Explain your answer.</p> <p> RPS HW/Ext</p>